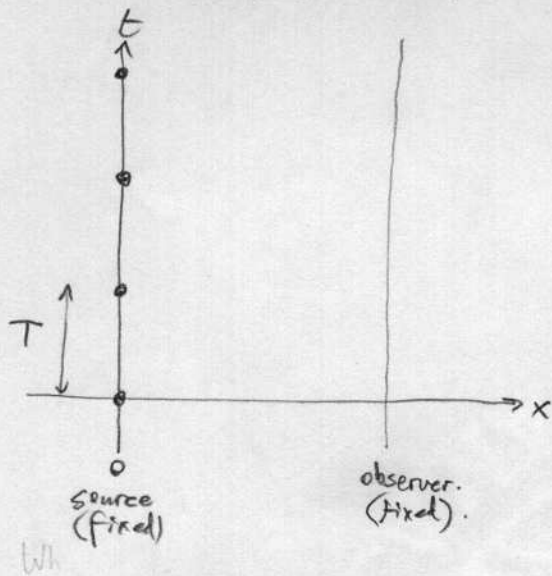


# Math 5 WORKSHEET : Doppler effect.

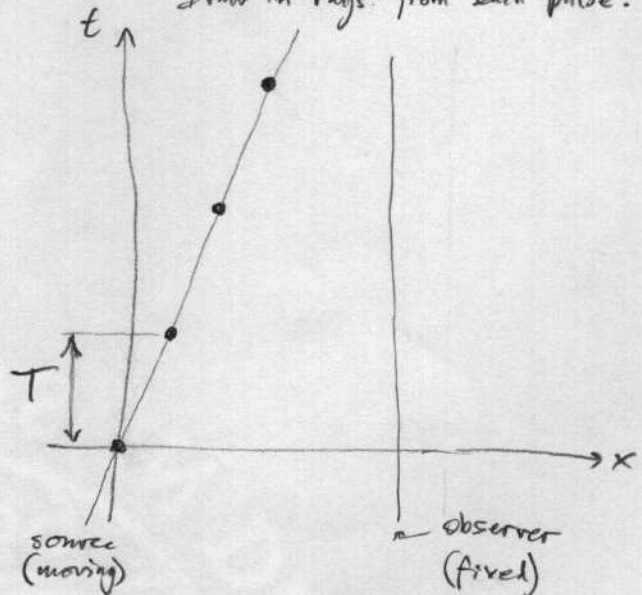
Consider a fixed period source.

Draw in the rays from each pulse:



Now consider the source moving at speed  $v$ .

Draw in rays from each pulse:



For fixed source, what is the period  $T_{obs}$  between pulses arriving at observer?

Answer the same question for moving source case:

first, is  $T_{obs} = T$ ?  
 $T_{obs} > T$ ?  
 $T_{obs} < T$ ?

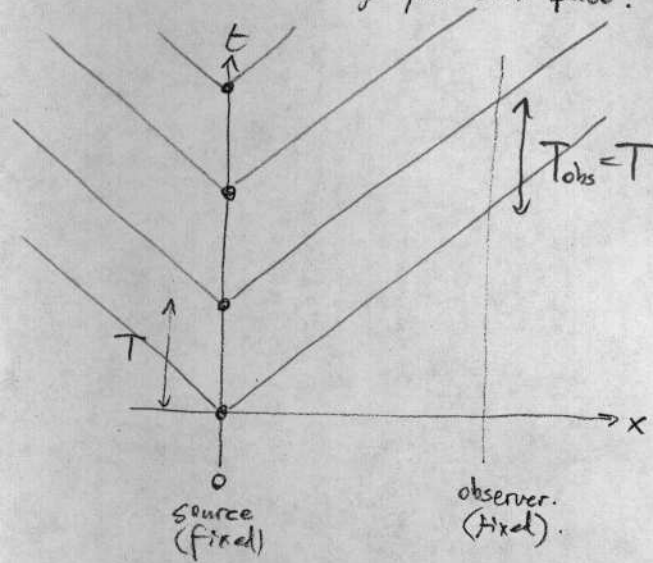
[Hint: how much closer is the source in the time between pulses?]

So, what is the frequency observer hears compared to frequency emitted?

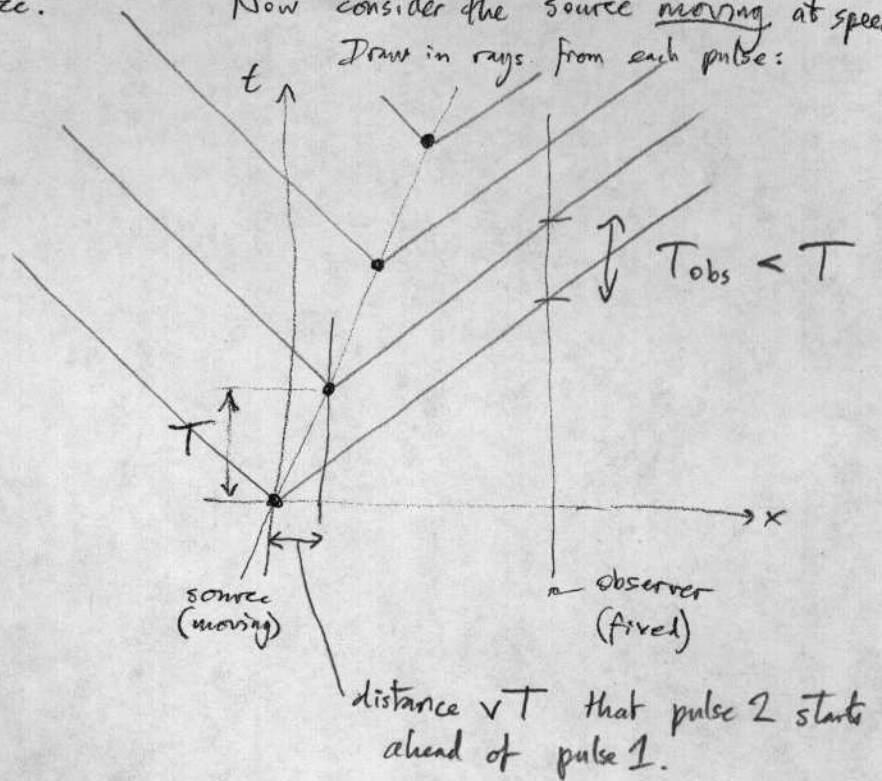
What if moving away now?

# Math 5 WORKSHEET : Doppler effect. SOLUTIONS

Consider a fixed period source.  
Draw in the rays from each pulse:



Now consider the source moving at speed  $v$   
Draw in rays from each pulse:



For fixed source, what is the period  $T_{obs}$  between pulses arriving at observer?

$T_{obs} = T$  since all pulses have to travel same distance

Answer the same question for moving source case: first, is  $T_{obs} = T$ ?  
 $T_{obs} > T$ ?  
 $T_{obs} < T$ ?

The only relevant distance is how much closer the 2nd pulse is emitted relative to the 1st one.

[Hint: how much closer is the source in the time between pulses?] → it is a distance  $vT$  closer since source moves at speed  $v$ .  
amount that travel time shortened.

$$T_{obs} = T - \frac{vT}{c} = T \left(1 - \frac{v}{c}\right)$$

So, what is the frequency observer hears compared to frequency emitted?

$$f_{obs} = f \frac{1}{1 - \frac{v}{c}}$$

What if moving away now? replace  $v$  by  $-v$ .