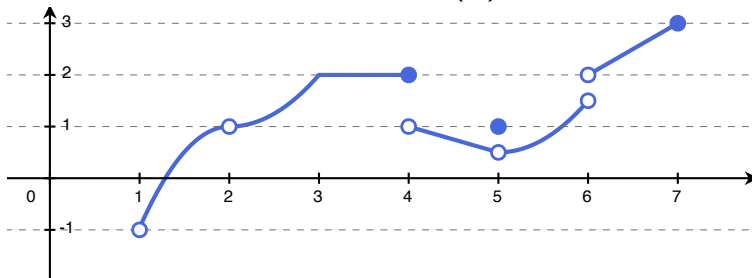


Continuity

Warm-up

Suppose the graph of $y = f(x)$ looks like



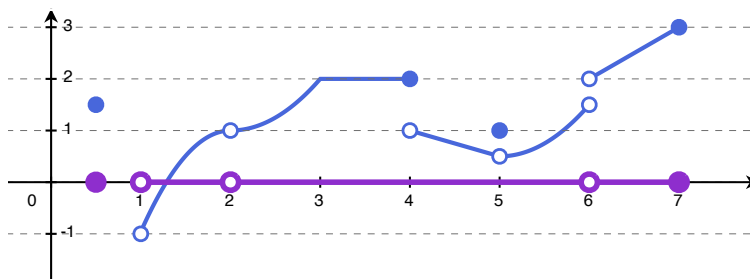
answers to 4.:

a	$x \rightarrow a^-$	$x \rightarrow a^+$

1. What is the domain of $f(x)$?
2. What is the range of $f(x)$?
3. For which values a in $[1, 7]$ does $\lim_{x \rightarrow a} f(x)$ not exist?
4. For those values you picked out in 3., what are $\lim_{x \rightarrow a^-} f(x)$ and $\lim_{x \rightarrow a^+} f(x)$?
5. Which values a satisfy

$$f(a) \text{ and } \lim_{x \rightarrow a} f(x) \text{ exist, but } f(a) \neq \lim_{x \rightarrow a} f(x)?$$

Domain definitions



Let D be the domain of $f(x)$. Ex. $D = (1, 2) \cup (2, 6) \cup (6, 7]$
 Ex 2. $D = \{\frac{1}{2}\} \cup (1, 2) \cup (2, 6) \cup (6, 7]$

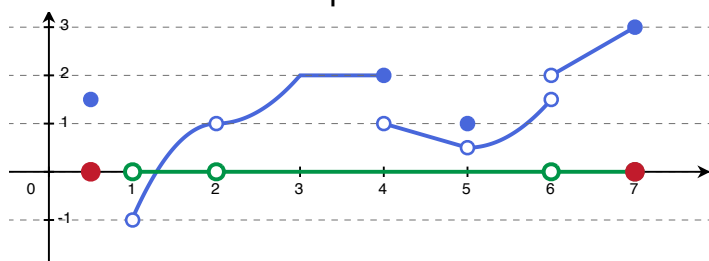
Definition

An *interior point* of D is any point **in** D which is not an endpoint or an isolated point.

Ex. Everything in D except $x = 7$.
 Ex 2. Everything in D except $x = \frac{1}{2}$ & 7 .

Continuity

Let a be an interior point of D .



Ex. $f(x)$ is discontinuous at $x = 4$ and 5 .
 No other points are fair game!

Definition

A function is *continuous* at a if $\lim_{x \rightarrow a} f(x) = f(a)$. If it is not continuous at a , then function is *discontinuous* at a .

Checklist:

1. Is a an interior point? *If no, stop here... we'll get back to these.*
2. Does (a) $\lim_{x \rightarrow a^-} f(x)$ exist? (b) $\lim_{x \rightarrow a^+} f(x)$ exist?
3. Does $\lim_{x \rightarrow a} f(x)$ exist? (i.e. does (a) = (b)?)
4. Does $f(a) = \lim_{x \rightarrow a} f(x)$?

If the answer to any of 2.-4. is "no", then $f(x)$ is discontinuous at a .

Some examples:

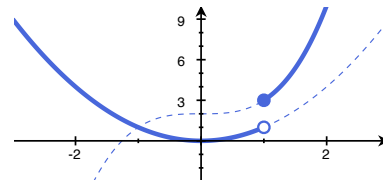
Over their domains, all
polynomials, rational functions, trigonometric functions,
exponential functions, absolute values,
and their inverses are all continuous functions.
(Jumps all happen over domain gaps)

Example: Is the function $f(x) = \begin{cases} x^2 & x < 1 \\ x^3 + 2 & 1 \leq x \end{cases}$ continuous?

Solution: The only possible problem would happen at $x = 1$. Let's check there:

$$\lim_{x \rightarrow 1^-} f(x) = \lim_{x \rightarrow 1^-} x^2 = 1$$

$$\lim_{x \rightarrow 1^+} f(x) = \lim_{x \rightarrow 1^+} x^3 + 2 = 3$$



No, $f(x)$ is discontinuous at $x = 1$ because 1 is an interior point of the domain, but $\lim_{x \rightarrow 1} f(x)$ does not exist.

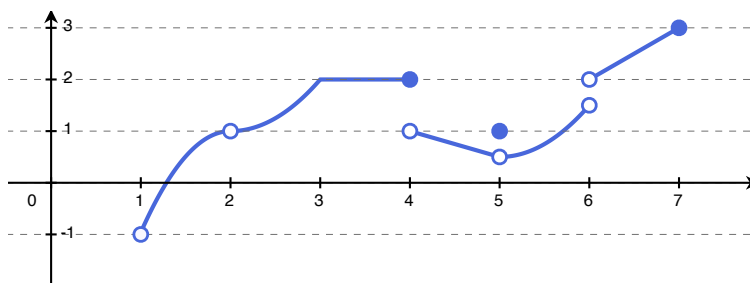
Right Continuity and Left Continuity

Definition

A function $f(x)$ is *right continuous* at a point a if it is defined on an interval $[a, b)$ and $\lim_{x \rightarrow a^+} f(x) = f(a)$.

Similarly, a function $f(x)$ is *left continuous* at a point a if it is defined on an interval $(b, a]$ and $\lim_{x \rightarrow a^-} f(x) = f(a)$.

Example:



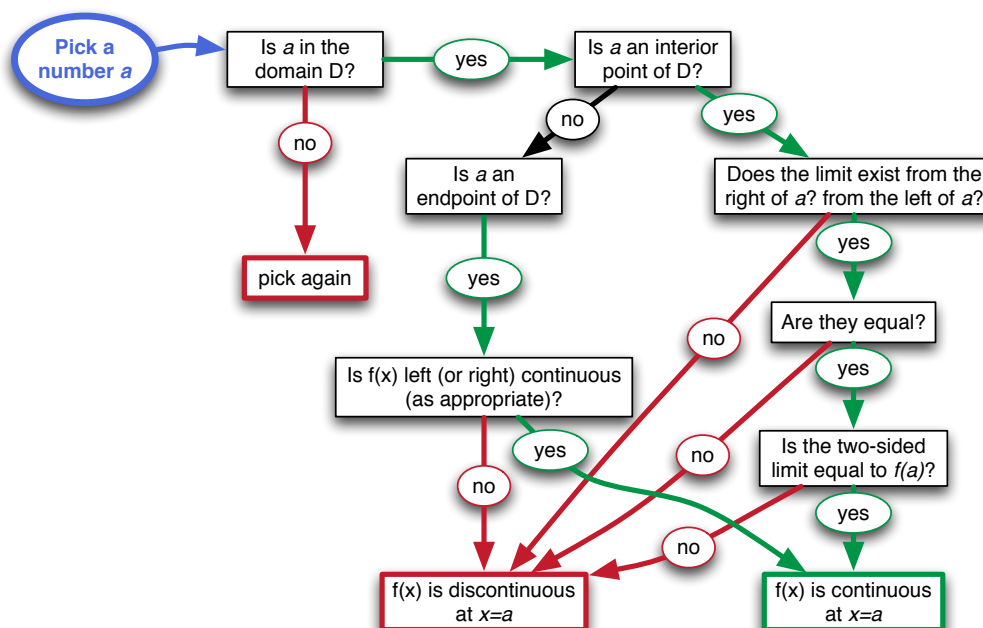
$f(x)$ is

- (a) continuous at every interior point in D except $x = 4$ and 5 ;
- (b) only right continuous at those points included in (a); and
- (c) additionally left continuous at $x = 4$ and $x = 7$.

Suppose a function f has no isolated points in its domain.

Definition

A function f is *continuous over its domain D* if **(1)** it is continuous at every interior point of D , and **(2)** it is left (or right) continuous at every endpoint of D . Otherwise, it has a *discontinuity* at each point in D which violates (1) or (2).



Filling and Fixing

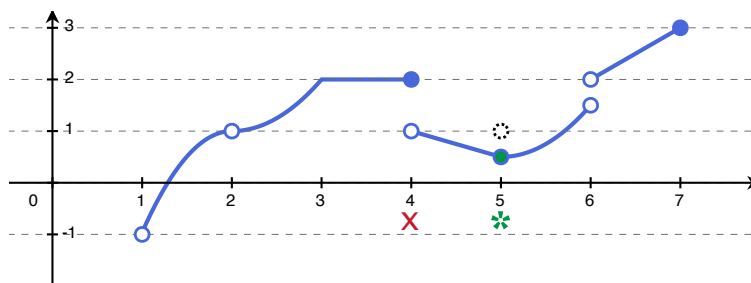
Suppose a is a point of discontinuity in D

(a) If a is an interior point and $\lim_{x \rightarrow a} f(x) = L$ exists; or

(b) if a is an endpoint and $\lim_{x \rightarrow a^\pm} f(x) = L$ exists,

then we say $f(x)$ has a *removable discontinuity*:

$$\bar{f}(x) = \begin{cases} f(x) & x \neq a \\ L & x = a \end{cases}$$



Example: $f(x)$ has a removable discontinuity in exactly one place:

$$\bar{f}(x) = \begin{cases} f(x) & x \neq 5 \\ 1 & x = 5 \end{cases}$$

Filling and Fixing

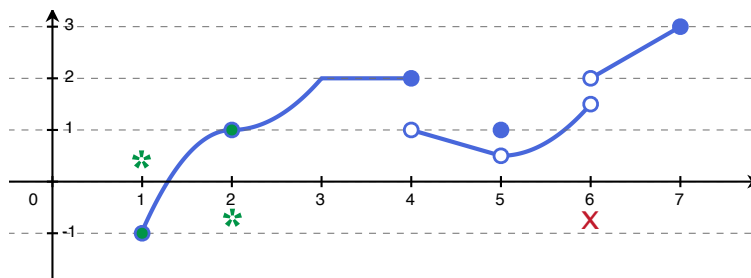
Suppose a is a hole in D (a is arbitrarily close to points in D , but not in D).

(a) If a would be an interior point and $\lim_{x \rightarrow a} f(x) = L$ exists; or

(b) if a would be an endpoint and $\lim_{x \rightarrow a^\pm} f(x) = L$ exists,

then we say $f(x)$ has a *continuous extension*:

$$\bar{f}(x) = \begin{cases} f(x) & x \neq a \\ L & x = a \end{cases}$$



Example: $f(x)$ has continuous extensions in exactly two places:

$$\bar{f}_1(x) = \begin{cases} f(x) & x \neq 1 \\ -1 & x = 1 \end{cases} \quad \text{and} \quad \bar{f}_2(x) = \begin{cases} f(x) & x \neq 2 \\ 1 & x = 2 \end{cases}$$

Examples

- (A) Which of the following have removable discontinuities? For those which do, what are the alternate functions with those discontinuities removed?
- (B) Which of the following have continuous extensions? For those which do, what are those extensions?

1. $f(x) = \frac{x^2 - 4}{x - 2}$

2. $f(x) = \begin{cases} \sin x & x \neq \pi/3 \\ 0 & x = \pi/3 \end{cases}$

3. $f(x) = \frac{|x|}{x}$

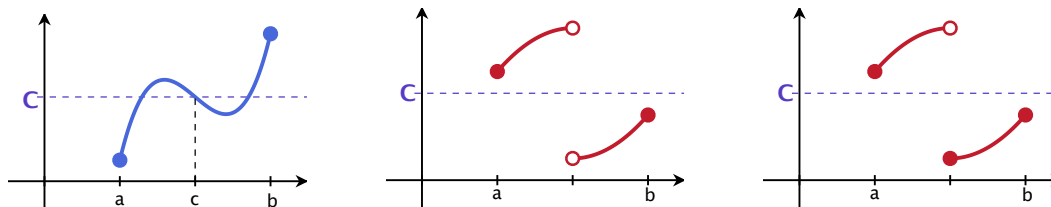
One application: The Intermediate Value Theorem

Suppose f is continuous on a closed interval $[a, b]$.

If $f(a) < C < f(b)$ or $f(a) > C > f(b)$,

then there is at least one point c in the interval $[a, b]$ such that

$$f(c) = C.$$



Example 1: Show that the equation $x^5 - 3x + 1 = 0$ has at least one solution in the interval $[0, 1]$.

Example 2: Show every polynomial

$$p(x) = a_n x^n + \cdots + a_1 x + a_0, \quad a_n \neq 0$$

of odd degree has at least one real root (a solution to $p(x) = 0$).

Extra practice:

Where is a function continuous?

In general: What does it mean for a function $f(x)$ to be continuous at $x = a$? Explain how to test if a function is continuous at $x = a$.

Specifically:

1. For which values of x is the function $f(x) = x^2 + 3x + 4$ continuous? Justify your answer with limits if necessary and draw a graph of the function to illustrate your answer.
2. For which values of x is the function $f(x) = \begin{cases} \frac{x^2 - x - 6}{x - 3}, & \text{if } x \neq 3, \\ 5, & \text{if } x = 3, \end{cases}$ continuous? Justify your answer with limits if necessary and draw a graph of the function to illustrate your answer.
- * 3. For which values of x is the function $f(x) = \begin{cases} \frac{\sin 3x}{x}, & \text{if } x \neq 0, \\ 1, & \text{if } x = 0, \end{cases}$ continuous? Justify your answer with limits if necessary and draw a graph of the function to illustrate your answer.
- * 4. For which values of x is the function $f(x) = \begin{cases} \frac{1 - \cos x}{x^2}, & \text{if } x \neq 0, \\ 1, & \text{if } x = 0, \end{cases}$ continuous? Justify your answer with limits if necessary and draw a graph of the function to illustrate your answer.
- * 5. Determine the value of k for which the function $f(x) = \begin{cases} \frac{\sin 2x}{5x}, & \text{if } x \neq 0, \\ k, & \text{if } x = 0, \end{cases}$ is continuous at $x = 0$. Justify your answer with limits if necessary and draw a graph of the function to illustrate your answer.
6. For which values of x is the function $f(x) = \begin{cases} x - 1, & \text{if } 1 \leq x < 2, \\ 2x - 3, & \text{if } 2 \leq x \leq 3, \end{cases}$ continuous? Justify your answer with limits if necessary and draw a graph of the function to illustrate your answer.
7. For which values of x is the function $f(x) = \begin{cases} \cos x, & \text{if } x \geq 0, \\ -\cos x, & \text{if } x < 0, \end{cases}$ continuous? Justify your answer with limits if necessary and draw a graph of the function to illustrate your answer.
8. For which values of x is the function $f(x) = \begin{cases} \sin(1/x), & \text{if } x \neq 0, \\ 0, & \text{if } x = 0, \end{cases}$ continuous? Justify your answer with limits if necessary and draw a graph of the function to illustrate your answer.

***Save #3-5 for later**

9. Find the value of a for which the function $f(x) = \begin{cases} ax + 5, & \text{if } x \leq 2, \\ x - 1, & \text{if } x > 2, \end{cases}$ is continuous at $x = 2$. Justify your answer with limits if necessary and draw a graph of the function to illustrate your answer.
10. For which values of x is the function $f(x) = \begin{cases} 1 + x^2, & \text{if } 0 \leq x \leq 1, \\ 2 - x, & \text{if } x > 1, \end{cases}$ continuous? Justify your answer with limits if necessary and draw a graph of the function to illustrate your answer.
11. For which values of x is the function $f(x) = 2x - |x|$ continuous? Justify your answer with limits if necessary and draw a graph of the function to illustrate your answer.
12. Find the value of a for which the function $f(x) = \begin{cases} 2x - 1, & \text{if } x < 2, \\ a, & \text{if } x = 2, \\ x + 1, & \text{if } x > 2, \end{cases}$ is continuous at $x = 2$. Justify your answer with limits if necessary and draw a graph of the function to illustrate your answer.
13. For which values of x is the function $f(x) = \begin{cases} \frac{|x - a|}{x - a}, & \text{if } x \neq a, \\ 1, & \text{if } x = a, \end{cases}$ continuous? Justify your answer with limits if necessary and draw a graph of the function to illustrate your answer.
14. For which values of x is the function $f(x) = \begin{cases} \frac{x - |x|}{2}, & \text{if } x \neq 0, \\ 2, & \text{if } x = 0, \end{cases}$ continuous? Justify your answer with limits if necessary and draw a graph of the function to illustrate your answer.
15. For which values of x is the function $f(x) = \begin{cases} \sin x, & \text{if } x < 0, \\ x, & \text{if } x \geq 0, \end{cases}$ continuous? Justify your answer with limits if necessary and draw a graph of the function to illustrate your answer.
16. For which values of x is the function $f(x) = \begin{cases} \frac{x^n - 1}{x - 1}, & \text{if } x \neq 1, \\ n, & \text{if } x = 1, \end{cases}$ continuous? Justify your answer with limits if necessary and draw a graph of the function to illustrate your answer.
17. Explain how you know that $f(x) = \sec x$ is continuous for all values of x . Justify your answer with limits if necessary and draw a graph of the function to illustrate your answer.
18. For which values of x is the function $f(x) = \cos |x|$ continuous? Justify your answer with limits if necessary and draw a graph of the function to illustrate your answer.

19. For which values of x is the function $f(x) = \lfloor x \rfloor$ continuous? Justify your answer with limits if necessary and draw a graph of the function to illustrate your answer.
20. For which values of x is the function $f(x) = \begin{cases} x^3 - x^2 + 2x - 2, & \text{if } x \neq 1, \\ 4, & \text{if } x = 1, \end{cases}$ continuous? Justify your answer with limits if necessary and draw a graph of the function to illustrate your answer.
21. For which values of x is the function $f(x) = |x| + |x - 1|$, $-1 \leq x \leq 2$, continuous? Justify your answer with limits if necessary and draw a graph of the function to illustrate your answer.

Answers

- | | | | |
|------------------------|--------------------------|-------------------------|----------------|
| 1. all x | 2. all x | 3. $x \neq 0$ | 4. $x \neq 0$ |
| 5. $k = 2/4$ | 6. $1 \leq x \leq 3$ | 7. $x \neq 0$ | 8. $x \neq 0$ |
| 9. $a = -2$ | 10. $x \geq 0, x \neq 1$ | 11. all x | 12. $a = 3$ |
| 13. $x \neq a$ | 14. $x \neq 0$ | 15. all x | 16. all x |
| 17. | 18. all x | 19. x not and integer | 20. $x \neq 1$ |
| 21. $-1 \leq x \leq 2$ | | | |