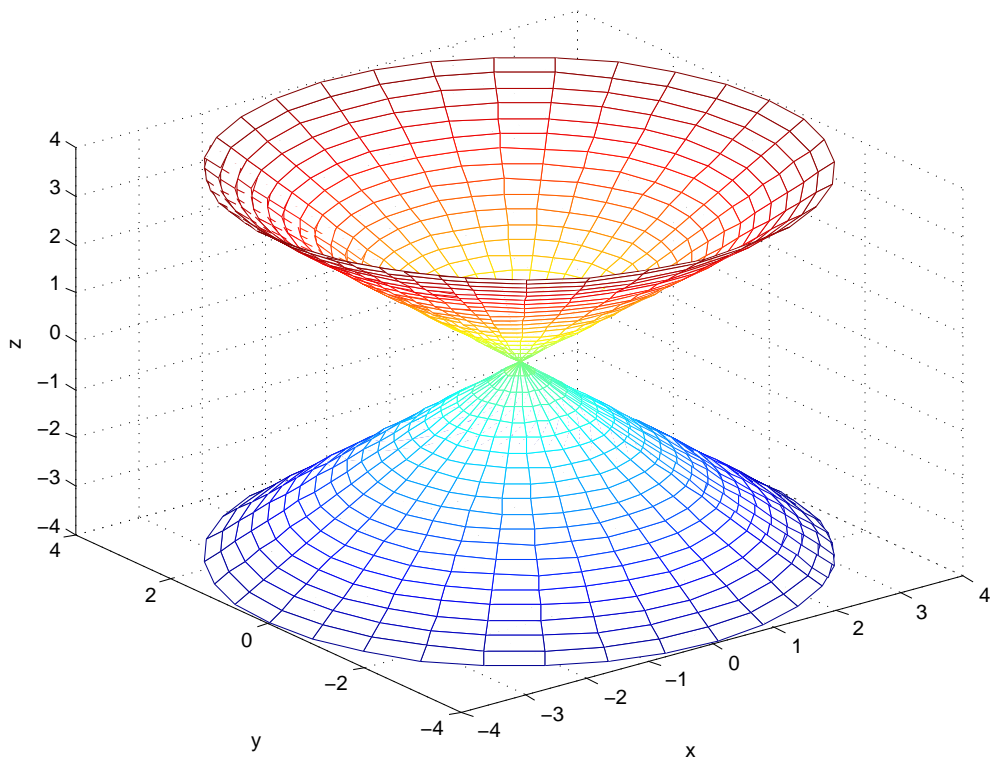


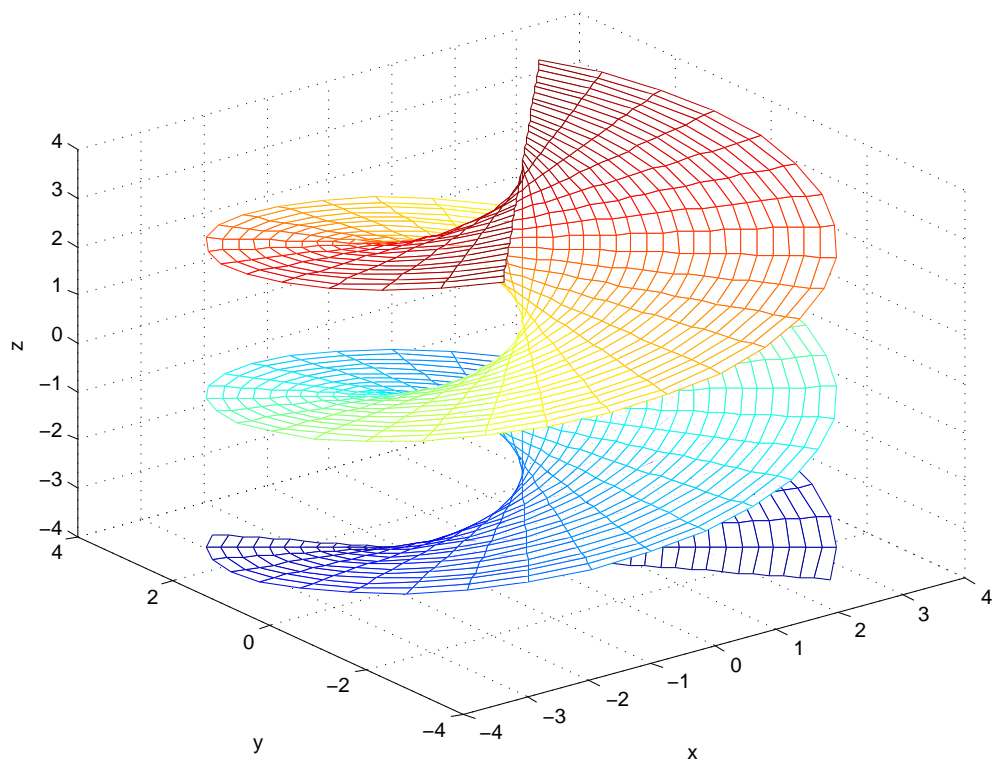
**Math 13 - Winter 2014**  
**Homework 7**  
Due Wednesday, 26 Feb. 2014.

- Except for problems that are stated explicitly, all problems are from Stewart Multivariable Calculus, 7th Edition.
  - Please show all of your work (writing a list of answers is not sufficient).
  - Please indicate the people you worked with.
  - Please staple your pages together.
1. Section 16.3 # 28
  2. Section 16.4 #27
  3. Match the equations with the graphs in Figures 1, 2, 3, and 4 on the next 4 pages. For each, determine which families of grid curves have  $u$  constant, and which have  $v$  constant.
    - (a)  $\mathbf{r}(u, v) = \cos v \mathbf{i} + \sin(v) \mathbf{j} + u \mathbf{k}$
    - (b)  $\mathbf{r}(u, v) = u \cos v \mathbf{i} + u \sin(v) \mathbf{j} + u \mathbf{k}$
    - (c)  $\mathbf{r}(u, v) = u \cos v \mathbf{i} + u \sin(v) \mathbf{j} + v \mathbf{k}$
    - (d)  $\mathbf{r}(u, v) = u^3 \mathbf{i} + u \sin(v) \mathbf{j} + u \cos v \mathbf{k}$
  4. Find an equation of the tangent plane to the parametric surface  $\mathbf{r}(u, v) = u^2 \mathbf{i} + (u - v^2) \mathbf{j} + v^2 \mathbf{k}$  at the point  $(1, 0, 1)$ .
  5. One parametric representation for the part of the cylinder  $x^2 + z^2 = a^2$  that lies in the cylinder  $x^2 + y^2 = a^2$  and in the first octant is  $\mathbf{r}(u, v) = u \mathbf{i} + v \mathbf{j} + \sqrt{a^2 - u^2} \mathbf{k}$ , with  $0 \leq u^2 + v^2 \leq a^2$ . Find another parameterization for the same surface.
  6. Section 16.6 # 64(a).



2

Figure 1



3

Figure 2

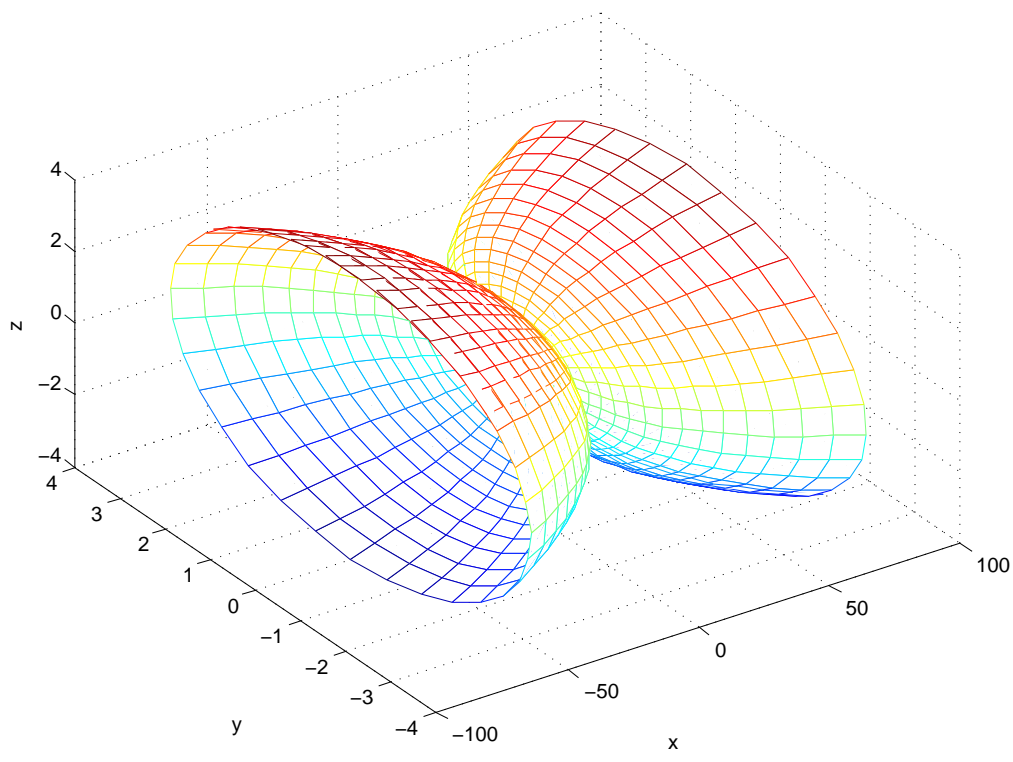
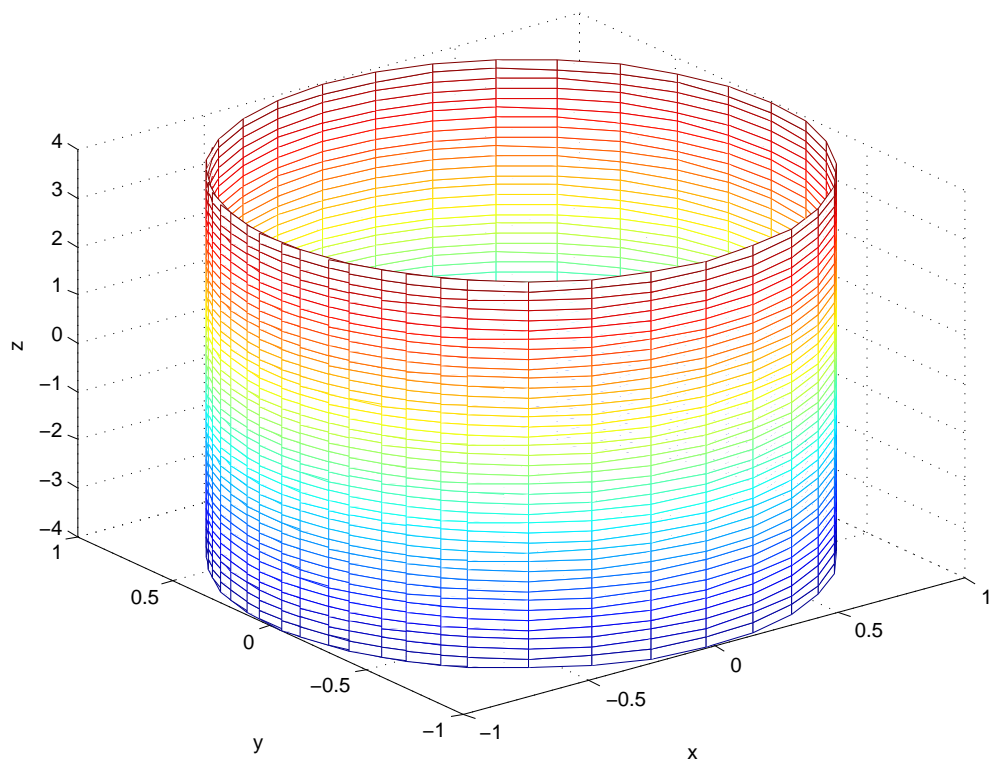


Figure 3



5

Figure 4